




10.7.20 Work to support your child at home

Maths


This week we have learnt how to add and subtract. We have practised how to spot doubles, number bonds and tricks for adding ten and 0. Today we are going to look at some word problems. You have to work out if it is an add or a subtract question. Draw a little jotting by your answer to show what resources you have used to work out the answer.

Green


A herd of 11 elephants joins up with another herd of 5.
How many elephants are there now?

A cartoon illustration of a grey elephant with a small tusk and a friendly expression.


If you had 5 birds in your garden and 1 of them flew away, how many birds would you have left?

A red cardinal and a small green bird with a yellow beak.


If you had 5 books and you have read 3 of them, how many would you have left?

A stack of five books with different colored spines (blue, green, yellow, red, and blue).

If you had 5 cherry cakes and 5 plain cakes, how many would you have altogether?

Ten cupcakes arranged in two rows of five. The top row has five cupcakes with white frosting and a red cherry. The bottom row has five plain cupcakes with white frosting.

Answer:



Amber

14 meerkats are foraging for food.
An eagle flies over and 7 run away.
How many are left?



13 vultures are sitting in a tree. 5 more
fly down to join them.
How many vultures are in the tree?




Selma has 6 birthday
presents. Her grandparents
bring her 4 more. How
many presents does she
have now?



Red

If you see 34 fish in a fish tank and 7 more are
put in, how many fish are there altogether?



There are 20 children in
the class. 14 are having a
school dinner.

How many
children are not
having a school
dinner today?




If you spot 36 butterflies in your garden and 11 more join them, how many butterflies would



there be altogether?

Keeva has 20 teddies. 14 of them are in her toy box and the rest are on her bed. How many teddies are on her bed?



RED HOT CHALLENGE

If you find 49 wooden beads under the sofa and then find another 50 in a box, how many beads would you have?



Jafar was playing marbles. He started with 26 marbles. His friend gave him 12 more.

How many does he now have?

Jafar wants to play a game that needs 50 marbles, how many more does he need?



ENGLISH Friday 10.7.2020

This week we are looking at the story 'Where the wild things are'.

Today is the day to write your story into your home learning books. Do not worry. Just do the best that you can.

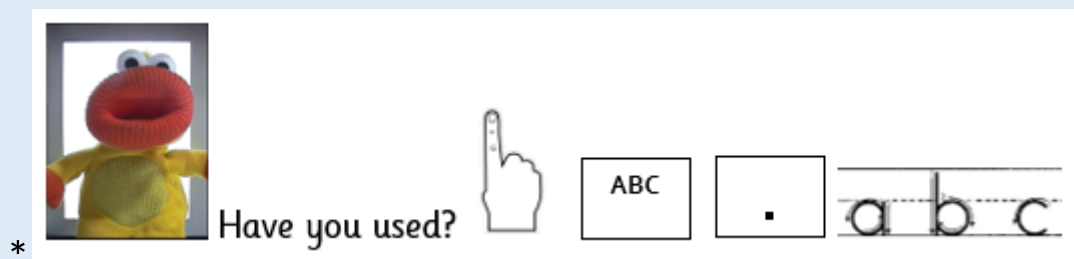
Read your plan through first to check that it makes sense and that you can remember what you are writing.

Main task:

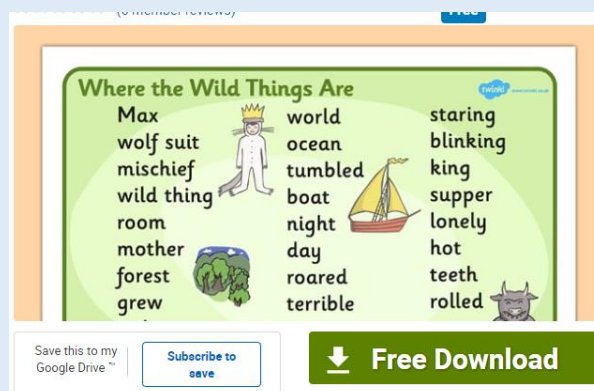
*Turn to a clean page in your home learning book.

*Use your plan to help you.

*THINK IT, SAY IT, WRITE IT, CHECK IT 😊



*This free word mat from Twinkl may give you some adventurous words to use: <https://www.twinkl.co.uk/resource/t-t-1350-where-the-wild-things-are-word-mat-text>



Don't forget to take a photo of your beautiful writing and show us on twitter!
@DevonshireInf

Phonics

Day 5 – Words of the week-

red yellow blue purple sometimes
there football alphabet elephant

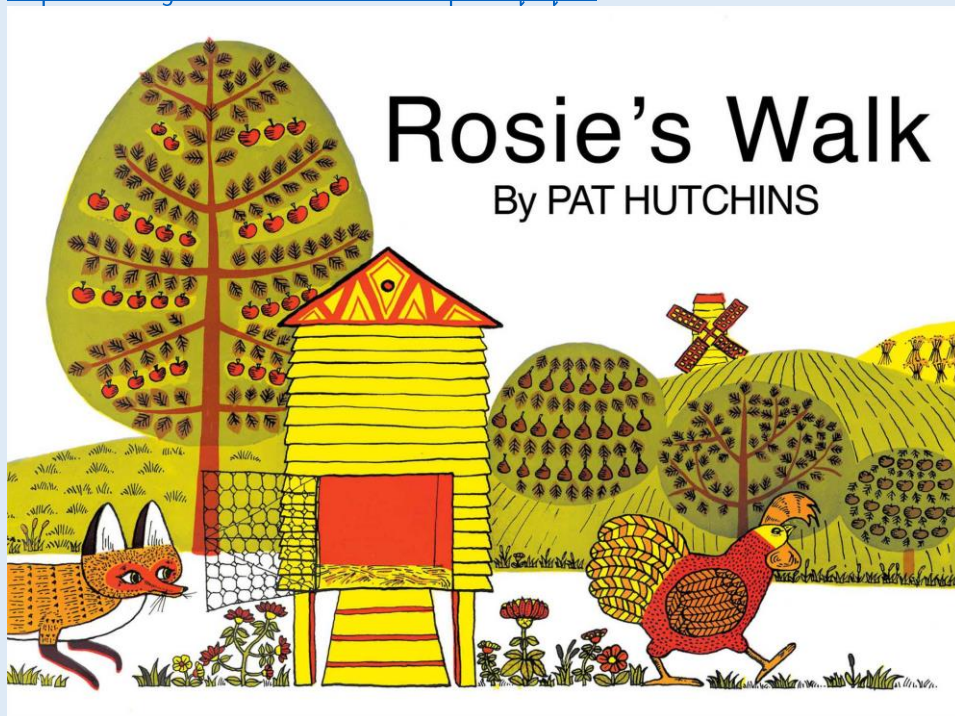
Ask a grown-up to give you a spelling test. Remind them to mix up the order of the words.

EXTRA GOLDEN TIME TASKS (FUN TIME!)

Normally on a Friday afternoon we would enjoy listening to a story and having some Golden Time.

Enjoy watching this story with a grown up. Fox is so busy following Rosie that he doesn't notice all the dangers!

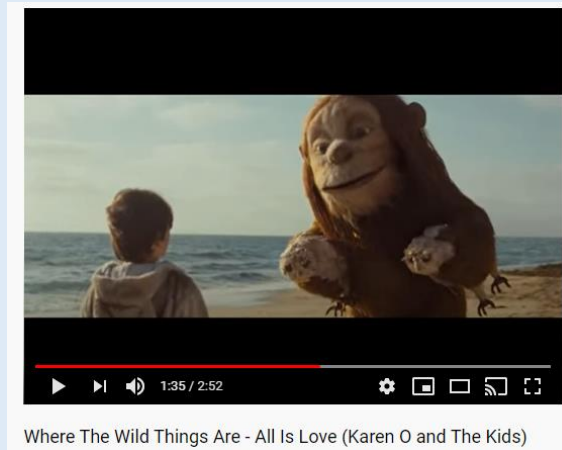
<https://www.youtube.com/watch?v=JpKThqAqKEI>



Here are some more activities for you linked to wild things. You do not need to do them all. Enjoy!

*This book was made into a film. Enjoy a song from the film:

<https://www.youtube.com/watch?v=e7mx8dDO3AQ>



*There are lots of pictures that you can copy or colour: http://www.coloring-book.info/coloring/coloring_page.php?id=224



*Have a go making a wild mask:

